


2H2: Homework #2 on constructions


1) Construct the perpendicular bisector of the segment below




2) Construct a 90° angle



3) Bisect the angle below



4) Find the center of the circle below



5) Draw a parallel line through the given point



Extra credit

Construct a 22.5° angle

